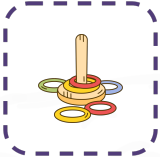






Number Bonds Within 10 Addition and Subtraction Puzzle Worksheet

Find the value of each picture and solve the final equation!

1)  +  = **12**  =

 +  = **4**  =

+ =

2)  +  = **10**  =

 +  = **85**  =

+ =